



























Mystery Money Grid (Canadian Coins)



Can you work out what the missing coins are?

| | \$ 1.90 | \$ 3.55 | \$ 2.50 | \$ 1.55 | \$ 3.30 | \$ 1.70 |
|---------|---|---|---|--|---|---|
| \$ 3.55 |  | | |  |  |  |
| \$ 3.20 |  |  | |  |  | |
| \$ 1.95 | |  |  | |  |  |
| \$ 1.60 |  |  | | |  |  |
| \$ 0.80 |  |  | |  | |  |
| \$ 3.40 | | |  |  |  |  |

