



























# Mystery Money Grid (US Coins)



Can you work out what the missing coins are?

|         | \$ 0.66                                                                             | \$ 0.71                                                                             | \$ 0.57                                                                             | \$ 0.18                                                                              | \$ 1.00                                                                               | \$ 0.58                                                                               |
|---------|-------------------------------------------------------------------------------------|-------------------------------------------------------------------------------------|-------------------------------------------------------------------------------------|--------------------------------------------------------------------------------------|---------------------------------------------------------------------------------------|---------------------------------------------------------------------------------------|
| \$ 0.63 |                                                                                     |    |                                                                                     |    |    |    |
| \$ 0.70 |    |    |    |                                                                                      |    |                                                                                       |
| \$ 0.56 |  |  |                                                                                     |  |                                                                                       |  |
| \$ 0.80 |  |                                                                                     |  |  |  |                                                                                       |
| \$ 0.38 |                                                                                     |  |  |                                                                                      |  |  |
| \$ 0.63 |                                                                                     |  |  |                                                                                      |  |  |

